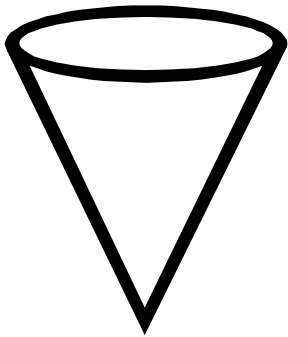



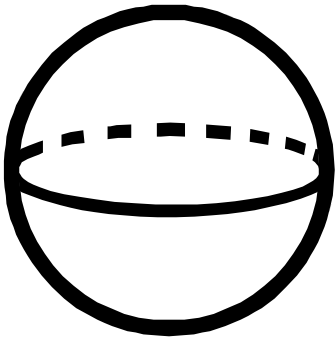
Find the faces, edges, and vertices.



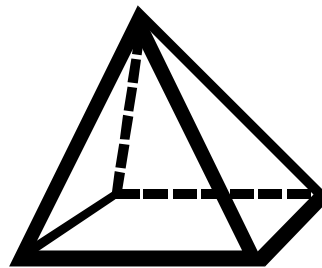
Cone	
faces	
edges	
vertices	



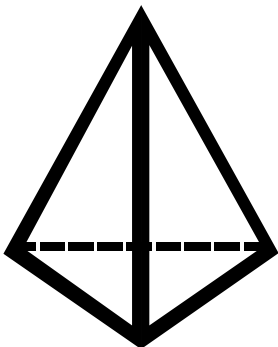
Cylinder	
faces	
edges	
vertices	



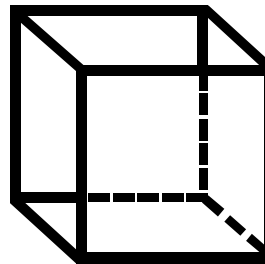
Sphere	
faces	
edges	
vertices	



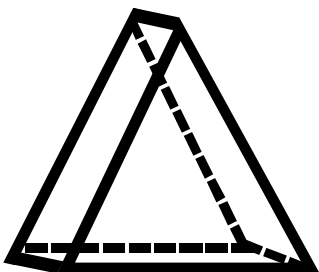
Square Pyramid	
faces	
edges	
vertices	




Triangular Pyramid	
faces	
edges	
vertices	



Cube	
faces	
edges	
vertices	



Triangular Prism	
faces	
edges	
vertices	



Rectangular Prism	
faces	
edges	
vertices	